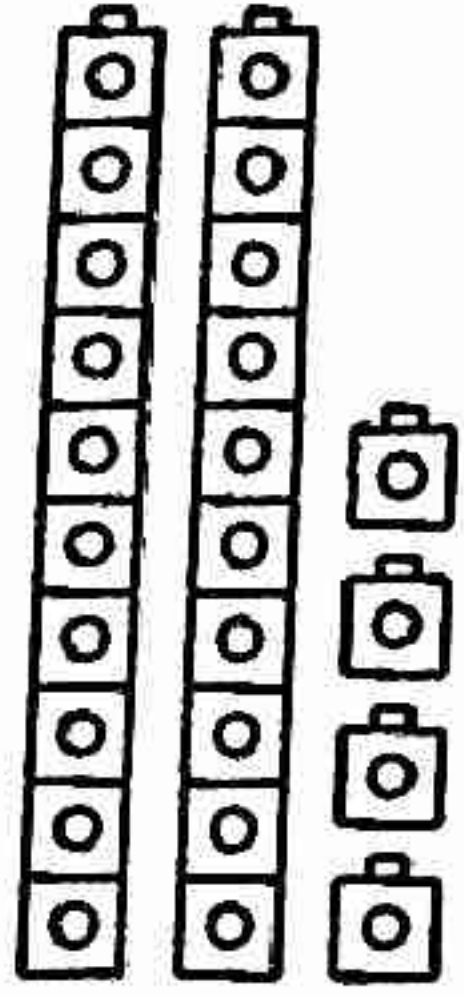
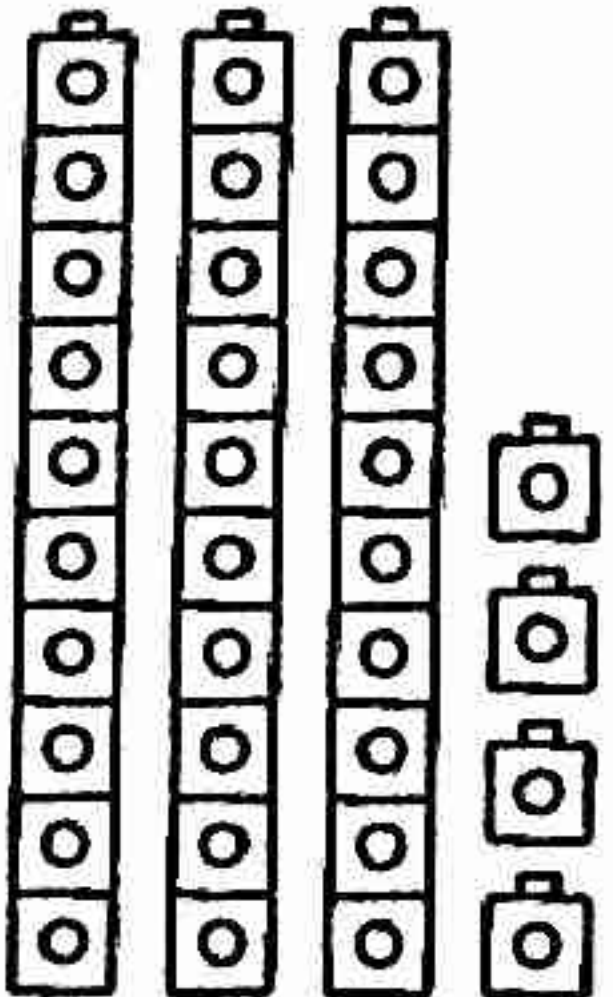
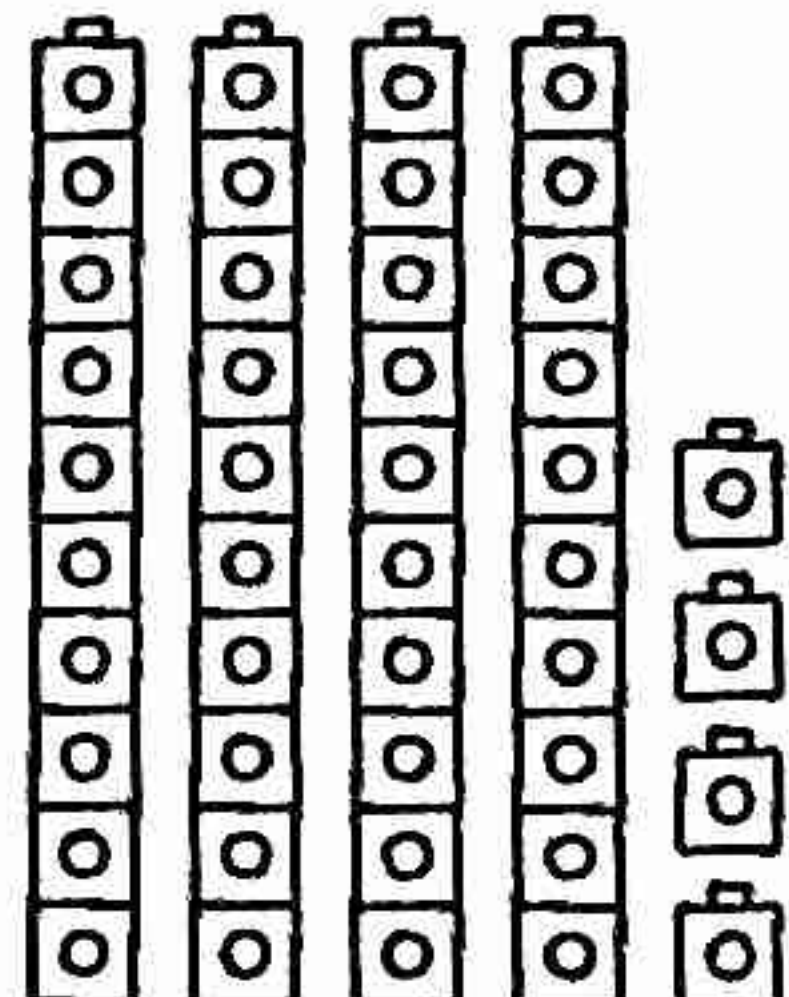
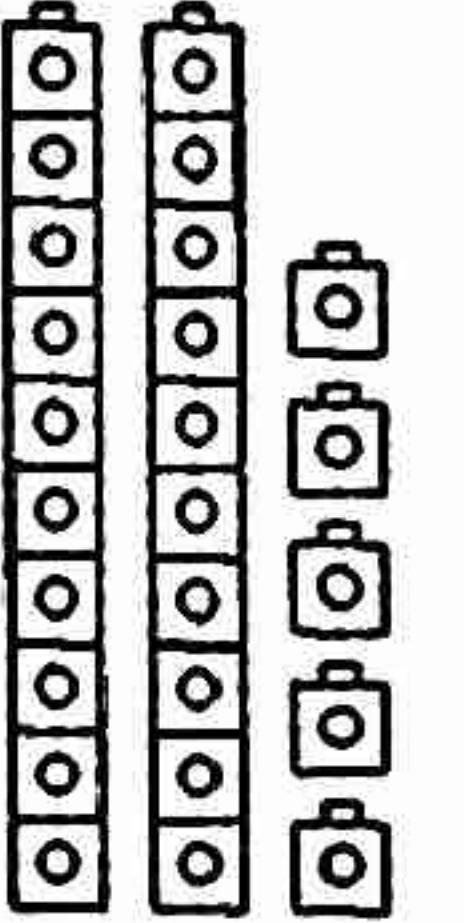
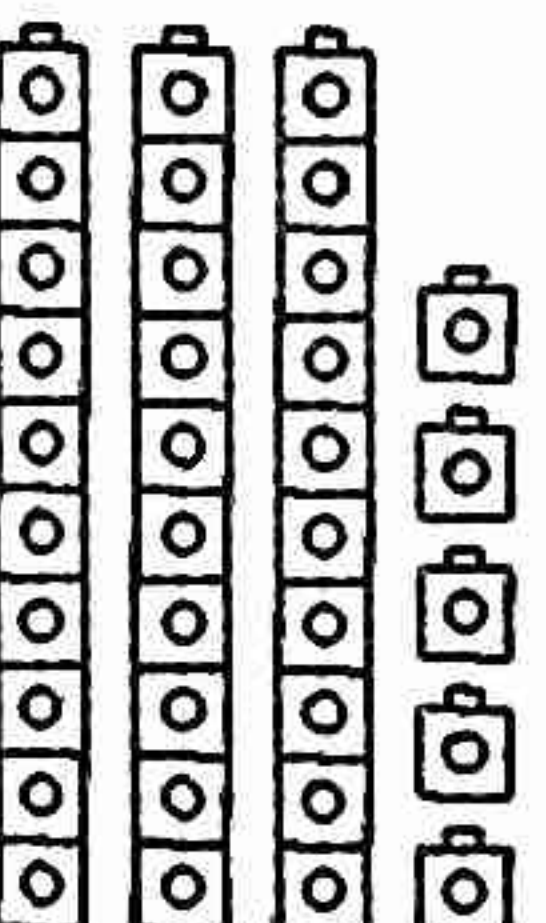


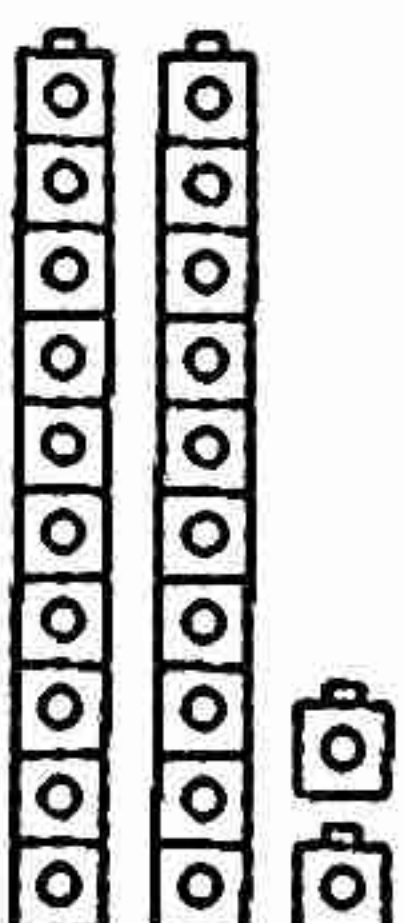
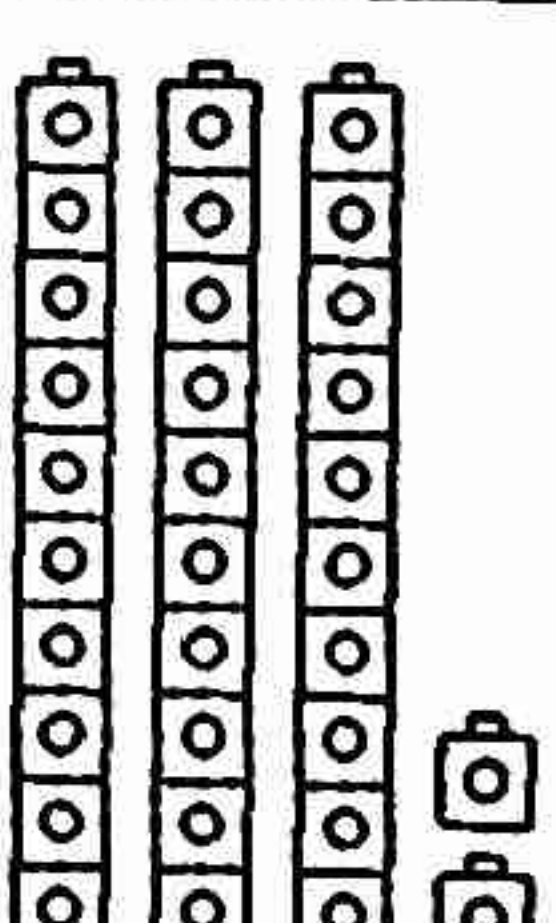


Name _____

10 Less, 10 More

<p>24 is 10 less than 34.</p>  <div style="text-align: center; margin-top: 10px;"> <div style="border: 1px solid black; width: 40px; height: 40px; display: flex; align-items: center; justify-content: center; margin: 0 auto;">24</div> </div>	 <div style="text-align: center; margin-top: 10px;"> <div style="border: 1px solid black; width: 40px; height: 40px; display: flex; align-items: center; justify-content: center; margin: 0 auto;">34</div> </div>	<p>44 is 10 more than 34.</p>  <div style="text-align: center; margin-top: 10px;"> <div style="border: 1px solid black; width: 40px; height: 40px; display: flex; align-items: center; justify-content: center; margin: 0 auto;">44</div> </div>
---	--	---

Write the numbers that are 10 less and 10 more.

<p>1.</p>  <div style="text-align: center; margin-top: 10px;"> <div style="border: 1px solid black; width: 40px; height: 40px; margin: 0 auto;"></div> </div>	 <div style="text-align: center; margin-top: 10px;"> <div style="border: 1px solid black; width: 40px; height: 40px; display: flex; align-items: center; justify-content: center; margin: 0 auto;">35</div> </div>	 <div style="text-align: center; margin-top: 10px;"> <div style="border: 1px solid black; width: 40px; height: 40px; margin: 0 auto;"></div> </div>
<p>2.</p>  <div style="text-align: center; margin-top: 10px;"> <div style="border: 1px solid black; width: 40px; height: 40px; margin: 0 auto;"></div> </div>	 <div style="text-align: center; margin-top: 10px;"> <div style="border: 1px solid black; width: 40px; height: 40px; display: flex; align-items: center; justify-content: center; margin: 0 auto;">22</div> </div>	 <div style="text-align: center; margin-top: 10px;"> <div style="border: 1px solid black; width: 40px; height: 40px; margin: 0 auto;"></div> </div>